



# KCM WORLD SCHOOL, PALWAL

## HOLIDAY HOMEWORK

### DIAMOND A & B (III)

(2023-24)

Name: \_\_\_\_\_

IT'S  
SUMMER  
TIME

**Summer vacation will commence from May \_ ,  
2023. The School will reopen on July \_ 2023.**

## Dear Parents

Summer Vacation is here – a respite from the sweltering heat, an ocean of time to relax, to pursue hobbies and to spend time with dear ones. Many of you may have planned pleasure trips to salubrious hills, exotic wilds or places of pilgrimage. You can also utilize this period to instill in your child the virtues of “Care and Share”, “Self-help”, “Learn from Environment” and “Cleanliness is Godliness”. Please keep him/her gainfully engaged in one meaningful activity or the other instead of lazing around and killing time. Wishing you and your ward an enriching and exhilarating vacation.



- ❖ Inculcate following **Life Skills** in your child to help him/her become independent:
  - Buttoning his/her shirt.
  - Tying his/her shoe laces.
  - Packing his/her belongings back in their place.
  - Following table manners.
  - Arranging shoes in the shoe rack.
- ❖ Imbibe following **Social Skills** in your child:
  - Giving respect to her/his young ones.
  - Greeting with a smile when someone comes to the house.
  - Wishing and welcoming guests.
  - Conversing freely with visitors, relatives coming over to the house.
  - Answering the phone calls with a polite “Hello”, Also asking “May I know who is calling?”
  - Spending time with grandparents.
  - Keeping the house clean.
  - Sitting at the dining table with the family to eat the meals.
  - Helping you in arranging dining table, after eating keep her/his plate in the kitchen.
  - Arranging her/his toy shelf.
  - Speaking politely to the peer group.
  - Making her/his own bed.
  - Watering the plants.
  - Taking care of pets. (In case, you have any)
  - Using four magical words- PLEASE, SORRY, THANK YOU and EXCUSE ME.
  - Sharing with the peers.

❖ **Personal Hygiene:** Encourage your child to take care of “Personal Hygiene” by inculcating the following habits:

- Brushing teeth twice daily.
- Combing hair regularly.
- Bathing everyday.
- Washing hands before and after meals.
- Trimming the nails and keeping them clean.

**Ensure to use the below mentioned sentences in your routine conversation:**

1. *Do you like to dance?*
2. *See you soon!*
3. *Can we be friends?*
4. *The sun is shining.*
5. *My mom makes me breakfast.*
6. *Did you sleep well?*
7. *I like your drawing/colouring dress.*
8. *Let's play together.*
9. *I have a question.*
10. *Can I have a bite/pillow/blanket?*
11. *It's time to go home.*
12. *Have a good afternoon.*
13. *I'm full.*
14. *Can you read me a story?*
15. *Thank you for your help.*
16. *Can I join your game?*
17. *Can we share a snack?*
18. *Please change my clothes.*
19. *Let me watch cartoon.*
20. *When will papa come?*
21. *I feel like vomiting.*
22. *Please pass me the vegetable.*
23. *Please clean my face.*
24. *Mom milk /water has spilled on my clothes.*
25. *He / She is tearing my book.*
26. *Draw the curtain.*
27. *Drag the chair.*
28. *Papa is not at home.*
29. *There is a call for you.*
30. *Papa, you are looking handsome.*





➤ **Pair each proper noun with the right common noun:**

**Proper noun**

**Common noun**

- |                   |                             |
|-------------------|-----------------------------|
| (a) Wordsworth    | (i) city                    |
| (b) New Delhi     | (ii) day                    |
| (c) Tuesday       | (iii) poet                  |
| (d) Rohan         | (iv) country                |
| (e) Ganga         | (v) boy                     |
| (f) India         | (vi) river                  |
| (g) Taj Mahal     | (vii) former Prime Minister |
| (h) Indira Gandhi | (viii) monument             |
| (i) January       | (ix) mountain               |
| (j) Everest       | (x) month                   |

➤ **Fill in the blanks with suitable collective nouns given in the help box:**



**elephants potatoes sweets chicks fish lions**

- |                       |                       |
|-----------------------|-----------------------|
| (a) a packet of _____ | (b) a brood of _____  |
| (c) a sack of _____   | (d) a herd of _____   |
| (e) a pride of _____  | (f) a school of _____ |

➤ **Tick the odd one out – based on the gender of the noun :**

- |              |          |          |
|--------------|----------|----------|
| (a) monk     | daughter | dog      |
| (b) husband  | bull     | aunt     |
| (c) goose    | mare     | elephant |
| (d) hen      | widow    | cow      |
| (e) princess | son      | count    |

➤ **Match the Synonyms**

	sad	pretty	
	end	gift	
	beautiful	unhappy	
	present	finish	

**Synonyms are the words that are the same or similar in meaning.**  
 For example  
 enough – ample, hot - warm etc.

➤ **Change the given positive sentences into their negative forms :**

- (a) I am nine years old. \_\_\_\_\_
- (b) The girl plucked the flower. \_\_\_\_\_
- (c) I am riding your bicycle. \_\_\_\_\_
- (d) All the buses were painted red. \_\_\_\_\_
- (e) The lost child was crying. \_\_\_\_\_

➤ **Write a synonym for the underlined words.**

1. The big bear slept quietly. \_\_\_\_\_
2. Her eyes were pretty. \_\_\_\_\_
3. Tom's house was dirty. \_\_\_\_\_
4. The performance was great. \_\_\_\_\_
5. His shoes were small. \_\_\_\_\_
6. Jack's dad was nice. \_\_\_\_\_
7. Jerry was happy. \_\_\_\_\_

➤ **Change the word that is underlined to its antonym.**

**Close, easy, found, chilly, early, hot, tallest, fast, happy**

1. My teacher gives hard homework. \_\_\_\_\_
2. We live far from my grandmom. \_\_\_\_\_
3. Have you lost your pencil? \_\_\_\_\_
4. School starts too late. \_\_\_\_\_
5. I like cold lunch. \_\_\_\_\_
6. Bob is the shortest boy in our class. \_\_\_\_\_
7. Today it will be warm outside. \_\_\_\_\_
8. Sue is sad about the party. \_\_\_\_\_
9. I am slow at running the race \_\_\_\_\_

An antonym is a word that means the opposite of another word. For example hot - cold, good - bad etc.

- **Project Work-** Make a photo frame with the help of coloured sheet and waste material. Paste your photograph on it and add 10 Adjectives which exactly describe you.
- **It's writing time-** Write the experience of your holidays on an A4 size Sheet. Include what you saw and liked, the food that you enjoyed. Also write what did you feel and learn.
- **Read the editorial page of an English newspaper everyday and write 5 new words that you read alongwith their synonyms in your fair notebook.**
- **Select 10 news reports from an English newspaper and copy them in a neat and beautiful handwriting (10 pages) in your PC.**
- **Solve the exercises based on comprehension given on page No. 8 – 11, 14 – 17, 22 – 24 of English Practice Book.**

# हिंदी

➤ निम्नांकित चित्रों को देखकर बताइए कि इन राज्यों में कौन-सी भाषा बोली जाती है?


(क)



(ख)



(ग)



(घ)



➤ निम्नांकित चित्रों को पहचानकर उनके नीचे लिखे शब्दों को उपयुक्त मात्रा लगाकर पूरा कीजिए।

(क)



पपीता

(ख)



मकड़

(ग)



अमरद

(घ)



जदगर

(ङ)



पध

(च)



पस

➤ नीचे वर्णों का क्रम उलट-पुलट गया है। इन्हें सही क्रम में लिखकर सार्थक शब्द बनाइए।

- |              |       |           |       |
|--------------|-------|-----------|-------|
| (क) लाबत     | _____ | (ख) रशरात | _____ |
| (ग) लीछम     | _____ | (घ) बकिता | _____ |
| (ङ) लगारेड़ी | _____ | (च) चाबगी | _____ |
| (छ) लौनाखि   | _____ | (ज) लागुब | _____ |

➤ निम्नलिखित व्यंजनों से कोई तीन शब्द बनाइए।







- |        |       |       |       |
|--------|-------|-------|-------|
| (क) ड  | _____ | _____ | _____ |
| (ख) ड़ | _____ | _____ | _____ |
| (ग) ढ  | _____ | _____ | _____ |
| (घ) ढ़ | _____ | _____ | _____ |

➤ नीचे बॉक्स में दिए गए शब्दों में र का अलग-अलग प्रकार से प्रयोग किया गया है। इन्हें छाँटकर सही जगह पर लिखिए।

स्वर्ग रास्ता समुद्र ट्राम ड्रामा सम्राट पर्वत कबूतर

- |       |       |       |       |
|-------|-------|-------|-------|
| (क) र | (ख) र | (ग) र | (घ) र |
| _____ | _____ | _____ | _____ |
| _____ | _____ | _____ | _____ |

➤ निम्नांकित चित्रों को पहचानकर शब्द लिखिए तथा उसमें संयुक्त व्यंजन पर ○ लगाइए।


- |   |       |  |       |
|---|-------|--|-------|
| (क)  | _____ | (घ)  | _____ |
| (ख)  | _____ | (ङ)  | _____ |
| (ग)  | _____ | (च)  | _____ |



➤ चित्रों को पहचानकर निम्नलिखित शब्द-सीढ़ी पूरी कीजिए।



			जा
--	--	--	----



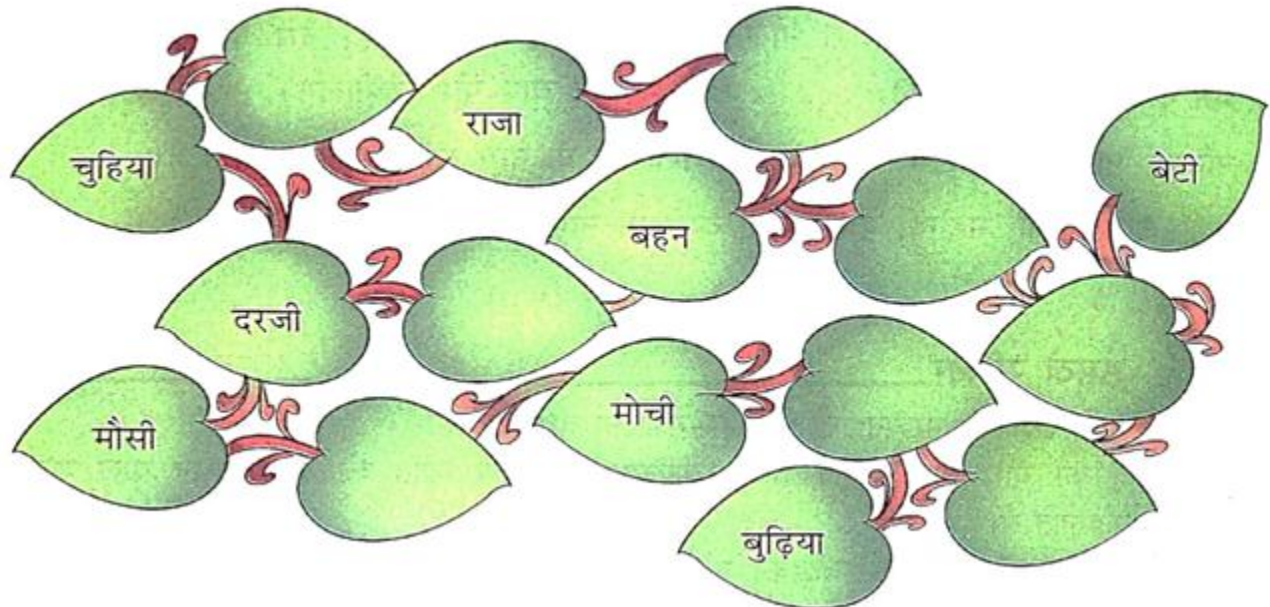



स		

	त	



➤ निम्नांकित खाली पत्तियों पर उचित लिंग लिखिए।



➤ निम्नलिखित अनुच्छेद में क्रिया शब्दों पर गोला ○ बनाइए।

एक दिन अध्यापक कक्षा में विज्ञान पढ़ा रहे थे। उन्होंने कुछ प्रश्न छात्रों को हल करने के लिए दिए। सभी छात्र प्रश्नों को हल करने में जुट गए। उन्हीं छात्रों में एक छात्र बहुत होशियार था। उसने थोड़े ही समय में सभी प्रश्नों को हल कर लिया और खड़े होकर बोला— "अध्यापक महोदय"! मैंने सभी प्रश्न हल कर लिए हैं।

➤ निम्नलिखित शब्दों के पर्यायवाची सही लिखिए।

(क)




---



---



---

(घ)




---



---



---

(ख)




---



---



---

(ङ)




---



---



---

(ग)




---



---



---

(च)




---



---



---

➤ सही विलोम शब्द पर (✓) का चिह्न लगाइए।

(क) सुख	—	○ खुशी	○ शोक	○ दुख
(ख) सुबह	—	○ प्रातः	○ शाम	○ दोपहर
(ग) खुशबू	—	○ बदबू	○ जय	○ सुवास
(घ) चुस्त	—	○ चतुर	○ सुस्त	○ फुर्ती
(ङ) लाभ	—	○ लोभ	○ हानि	○ नष्ट
(च) आदर	—	○ सम्मान	○ निरादर	○ अपमान

# MATHEMATICS

1. Circle the largest number-

- a) 526 517 562 518                      b) 679 697 687 678  
 c) 3298 3169 3578 3346                  d) 8123 8569 8268 8939

2. Write the place value and face value of each digit in the following numbers -

- a) 5467                      b) 2583                      c) 3729                      d) 5094

3. Put the correct sign  $>$ ,  $<$  or  $=$ .

- a. 3,678 \_\_\_\_\_ 5,869                      b. 1,359 \_\_\_\_\_ 1,245  
 c. 6,891 \_\_\_\_\_ 9,895                      d. 2,013 \_\_\_\_\_ 3,102

4. Write each of the following in the expanded form.

- a) 7651 = \_\_\_\_\_      b) 8093 = \_\_\_\_\_      c) 8666 = \_\_\_\_\_

5. What comes before and after to the given numbers?

S.NO	BEFORE	NUMBERS	AFTER
a		789	
b		5299	
c		599	

6. Write the name of each of the following numbers –

- a) 525                      \_\_\_\_\_  
 b) 320                      \_\_\_\_\_  
 c) 927                      \_\_\_\_\_

7. Complete the series:

a)

2001	2002			2005
2006		2008		
2011			2014	

b)

8601	8603	8605	
	8607	8609	
8611		8614	
	8617		8620

8. Write the short form of the following -

a)  $900 + 30 + 2 =$  \_\_\_\_\_

b)  $700 + 2 =$  \_\_\_\_\_

c)  $100 + 20 + 3 =$  \_\_\_\_\_

9. Circle the smallest number.

a) 412, 455, 318, 680                      b) 213, 549, 414, 893    c) 766, 805, 795, 545

10. Write the numeral for each of the following -

a) Seven thousand eight hundred and ninety-two \_\_\_\_\_

b) Five thousand six hundred and twenty-one \_\_\_\_\_

11. Circle the odd numbers and underline the even numbers.

a) 4,261              4,172              4,677              4,184

b) 279                      397                      487                      578

c) 6,298              6,169              7,578              8,346

d) 9,123              9,569              9,268              9,939

12. Write the predecessors of the following -

a) 2,140 \_\_\_\_\_

b) 4,362 \_\_\_\_\_

c) 4,159 \_\_\_\_\_

d) 7,789 \_\_\_\_\_

13. Arrange each of the following in ascending order.

a) 1,112, 336, 9,001, 8,213 \_\_\_\_\_

b) 5,539, 5,583, 5,577, 5,561 \_\_\_\_\_

c) 6,666, 6,869, 6,787, 6,582 \_\_\_\_\_

14. Write the Roman numerals for each of the following-

S. NO	NUMBERS	ROMAN NUMERALS
a	27	
b	35	
c	19	

15. Write the predecessor and successor of the following

a) 48 \_\_\_\_\_                      b) 273 \_\_\_\_\_                      c) 787 \_\_\_\_\_

16. Form the greatest and smallest 4-digit numbers with given digits.

4

6

5

2

\_\_\_\_\_

\_\_\_\_\_

17. Arrange each of the following in descending order.

a) 3,638, 5,120, 845, 4,133

\_\_\_\_\_

b) 2,002, 2,023, 2,046, 2,071

\_\_\_\_\_

c) 745, 3,445, 434, 4,523

\_\_\_\_\_

d) 7,118, 6,232, 5,261, 6,318

\_\_\_\_\_

18. Form four different numbers with given digits

a)

5      2      6      0

\_\_\_\_\_

\_\_\_\_\_

b)

8      9      0      4

\_\_\_\_\_

\_\_\_\_\_

c)

5      1      7      3

\_\_\_\_\_

\_\_\_\_\_

➤ **ACTIVITY 1- ODD AND EVEN POT**  
**STEPS:-**


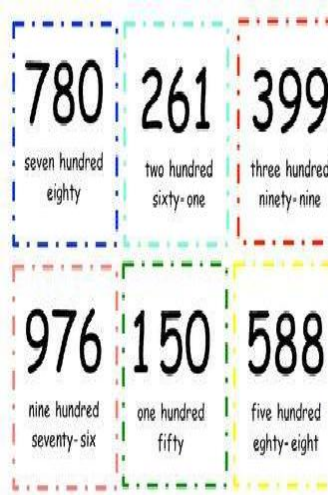
- Create two pots for Odd and Even numbers on a coloured sheet. (1-200)
- Go around in your house taking number suggestions from your family members and friends.
- Write those numbers on different coloured flowers and stick them on a thin hard surface for stability.
- Segregate those numbers into **Odd** and **Even** and stick the flowers inside the correct pot.

**Video link for reference :**

- <https://www.youtube.com/watch?v=5aMiAFKL9ts> (Shared in WhatsApp group)



**ACTIVITY-1**



**ACTIVITY-2**

### ➤ ACTIVITY 2- FLASH CARD MAKING

By using flashcards form a 4-digit number and write its number name, place value, successor and predecessor. Click on the reference link- (Shared in WhatsApp group)  
<https://youtu.be/SWgpB3N30g0>

*Steps:-*

- Choose any 4- digit number of your choice.
- Write down its number name, place value, successor and predecessor.
- Use flashcards to show the number chosen.
- Show the predecessor and successor using flash cards.

*Apart from the holiday homework students are advised to:*

- Learn "Tables" from 2 to 20 and revise them daily.
- Revise Chapter 1 & 2.

## SOCIAL SCIENCE

### ➤ Choose and tick mark the correct option in the following questions:

1. The vast space containing stars, planets, meteors etc is called \_\_\_\_\_.  
 a. Universe                      b. Galaxies                      c. Solar system                      d. none of these
2. He was the first to prove that the Earth is round.  
 a. Neil Armstrong              b. Columbus                      c. Marco Polo                      d. Ferdinand Magellan
3. Water exists in \_\_\_\_\_ forms.  
 a. Three                              b. Four                              c. Five                              d. Six
3. \_\_\_\_\_ is the main harvest festival of Tamil Nadu.  
 a. Pongal                              b. Lohri                              c. Baisakhi                      d. Onam
4. \_\_\_\_\_ is also known as the city of garden.  
 a. Bengaluru                      b. Jaipur                              c. Chandigarh                      d. Delhi
5. Kashmiri women wear \_\_\_\_\_.  
 a. Phiran                              b. Ghaghara                      c. Pyjama                              d. Kurta

### ➤ State whether these statements are true or false:

1. The outer surface of the Earth is made up of only water. \_\_\_\_\_
2. A model of the Earth is called a map. \_\_\_\_\_
3. Plants absorb oxygen to prepare the food. \_\_\_\_\_
4. The Earth takes 365 days to complete one orbit. \_\_\_\_\_
5. Ghagra-Choli is worn in the southern part of India. \_\_\_\_\_

### ➤ Fill in the blanks:

1. The world's largest fresh water lake is \_\_\_\_\_.
2. A type of fuel that does not pollute the environment \_\_\_\_\_.
3. The Gateway of India was built in the year \_\_\_\_\_
4. The Manipuri dance belongs to the \_\_\_\_\_ of India.
5. There are \_\_\_\_\_ union territories in a country.

➤ Match the following:

- |                      |                    |
|----------------------|--------------------|
| 1. Victoria Memorial | National Flag      |
| 2. Sitar             | Marina Beach       |
| 3. Tricolour         | Medicine           |
| 4. Chennai           | Musical instrument |
| 5. Doctor            | Kolkata            |

➤ Read the following statements and choose the correct option.

**1** This season has the longest days. It is hot. Everything is green.



**Spring**



**Summer**

**2** This season has the longest nights. It is cold. Some animals fall asleep.



**autumn**



**winter**

**3** Leaves on trees turn yellow, orange, and red. Animals collect food for winter.



**Spring**



**autumn**

**4** It gets sunnier and warmer. Birds build their nests. All is in bloom.



**Spring**



**winter**

# Science

➤ One day, John's mother cooked all his favourite food items for lunch. The food was tasty. John ate a lot of food without chewing properly. Immediately after lunch, he ran to the playground for a game of cricket. After an over of batting and running between the wickets, he complained of severe discomfort in his stomach.  
List three reasons why John felt uncomfortable.

---



---

- Read the passage carefully and list the different activities causing pollution.

It was early in the morning and the sun was just rising. The village was already bustling with activities. Some villagers were seen collecting kitchen waste into the compost bin to make compost. Some farmers were spraying pesticides in their farms. The morning routine in the chemical-manufacturing factory, situated at a distance from the village, had started. Black smoke was coming out of its chimneys. Some villagers were washing clothes and bathing animals in the river nearby. Other villagers were going to work on their bicycles. A few children were throwing plastic bottles into the river.

- Look at the picture given below and answer the questions.

1. Name the disease. \_\_\_\_\_

2. Write the main cause of this disease.  
\_\_\_\_\_

3. How can this disease be cured?  
\_\_\_\_\_



- Write down your observations and conclusions for the following:

1. You have added a drop of iodine solution on a piece of potato.  
\_\_\_\_\_

2. You have two plants A and B. You have watered Plant A daily, whereas you have not watered plant B.  
\_\_\_\_\_

3. Plant A is regularly watered but is kept in a dark corner of the room for many days.  
\_\_\_\_\_

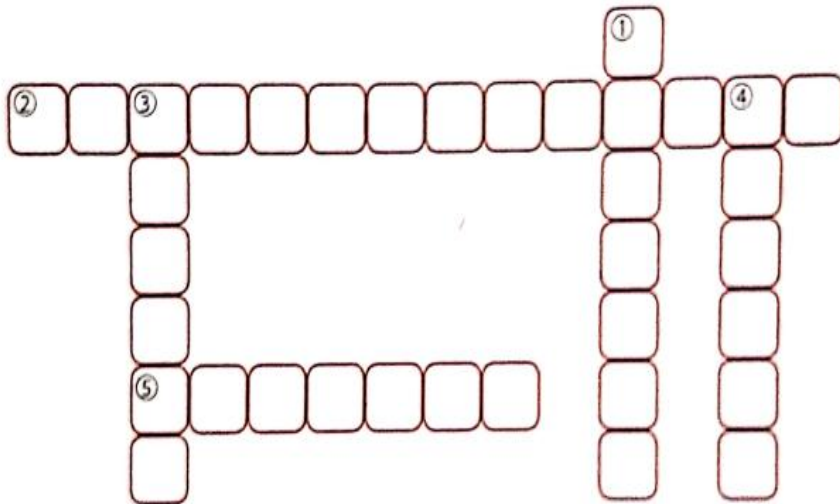
4. You see an insect sitting on the pitcher-shaped leaf of the pitcher plant.  
\_\_\_\_\_

5. You see an insect sitting on the leaf of a sundew plant.  
\_\_\_\_\_



➤ Given below are symptoms of five deficiency diseases. Read the clues and solve the crossword.

- |                                  |                                  |
|----------------------------------|----------------------------------|
| 1. decrease in haemoglobin level | 2. inability to see in dim light |
| 3. swelling in the neck region   | 4. bleeding gums                 |
|                                  | 5. bow legs                      |



➤ Identify and write whether these objects are luminous or non-luminous. Write L for luminous and N for non-luminous.

1.



4.



2.



5.



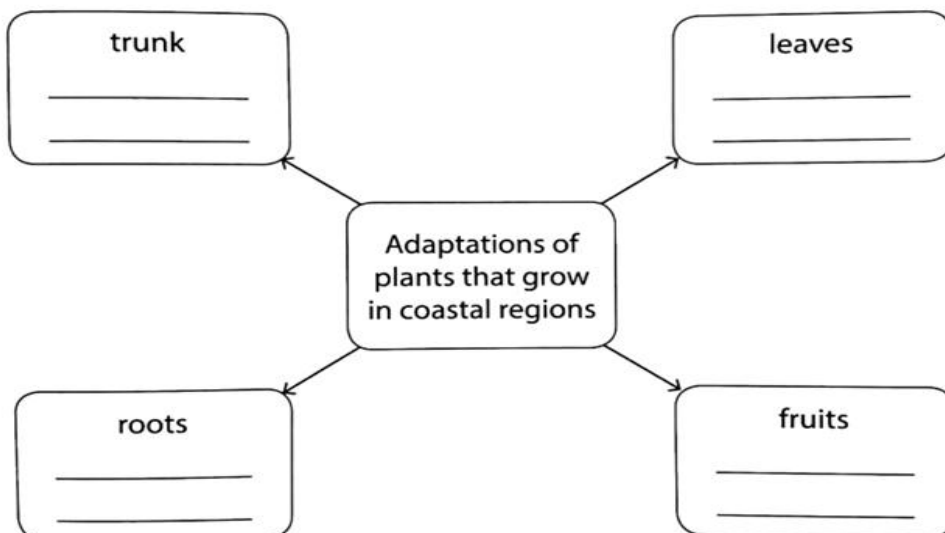
3.



6.



➤ Complete the flow chart.



## Computer

Make a drawing on “*Use strong Password*” under the theme “*Stay safe online*” on A4 Sheet.

## ART & CRAFT

Dear Parents

Kindly use the link given below (shared in the WhatsApp group also) and help your ward to make a coconut shell doll (For grade 3A) & pen stand (For grade 3B), to be submitted alongwith holiday homework booklet.

**Grade 3A - <https://youtu.be/pd3KWZ79vzE>**

**Grade 3B - <https://youtu.be/A83xU6XWosk>**

**NOTE : Parents are requested to ensure that the students complete all the assignment sheets given to them alongwith this booklet during Summer Vacation.**